








Future 4th Graders Summer Homework Packet



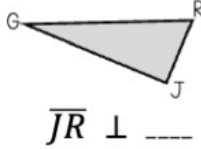

Due: Thursday, September 4th

Name: _____

SUMMER READING ROAD TRIP



Sunday	Monday	Tuesday	Wednesday	Thursday	Friday	Saturday
1 How many ounces are in 7 pounds 13 ounces?	2 I'm a prime number between 1 and 10. I'm also a factor of 49. What number am I?	3 What is the value of the underlined digit? $4\underline{6}5,672$	4 Estimate. Before adding, round each number to its greatest place value. $27,365 + 49,072$	5 Estimate. Before multiplying, round the multi-digit factor to its greatest place value. 729×6	6 What numerator makes these fractions equivalent? $\frac{3}{4} = \frac{?}{12}$	7 Write 0.73 as a fraction.
8 A rectangular yard has a length of 26 ft and a width of 13 ft. Calculate its area.	9 What are the next two numbers in the pattern? 5, 20, 35, ____, ____	10 The value of the 7 in 567,129 is ____ times the value of the 7 in 894,715.	11 Estimate. Before subtracting, round each number to its greatest place value. $62,214 - 38,195$	12 Estimate. Before dividing, round the dividend to the nearest compatible number. $438 \div 9$	13 Which fraction is greater? $\frac{5}{8}$ or $\frac{7}{12}$	14 Write $\frac{4}{10}$ as a decimal.
15 An angle measures 95° . What type of angle is it?	16 Which number between 20 and 30 has an odd number of factors?	17 Which number is greater? $293,416$ or $289,578$	18 Solve. $56,234 + 17,058$	19 Solve. 7×548	20 Solve. $\frac{5}{8} + \frac{4}{8}$	21 What numerator makes these fractions equivalent? $\frac{7}{10} = \frac{?}{100}$
22 Draw the following figure: \rightarrow BA	23 ____ times as many as 6 is 48.	24 Round this number to the nearest 100,000. $348,997$	25 Solve. $38,925 - 16,087$	26 Solve. $372 \div 4$	27 Solve. $3\frac{11}{12} - \frac{7}{12}$	28 Use $<$, $>$, or $=$ to compare the decimals. 0.9 ____ 0.09
29 How many lines of symmetry does this figure have? 	30 What factors do 12 and 54 have in common?	<div>  <div> MATH REVIEW OF THE DAY JUNE 2025 </div>  </div>				

Sunday	Monday	Tuesday	Wednesday	Thursday	Friday	Saturday
JULY 2025 		1 Write this number in standard form. $600,000 + 7,000 + 200 + 40 + 1$	2 Estimate. Before adding, round each number to its greatest place value. $519,421 + 178,056$	3 Solve. $869 \div 3$	4 What denominator makes these fractions equivalent? $\frac{2}{5} = \frac{4}{?}$	5 Write 0.2 as a fraction.
6 How many sets of parallel lines does this figure have? 	7 I am a number between 60 and 70. I am a multiple of 8. What number am I?	8 Write this number in word form. $340,216$	9 Estimate. Before subtracting, round each number to its greatest place value. $923,753 - 408,964$	10 Estimate. Before multiplying, round the multi-digit factor to its greatest place value. $7 \times 8,159$	11 Solve. $\frac{3}{4} \times 7$	12 Write $\frac{9}{100}$ as a decimal.
13 Use the figure. 	14 List all of the factors of 56 in order from least to greatest.	15 Round this number to the nearest 1,000. $980,605$	16 Solve. $478,395 + 236,240$	17 Estimate. Before dividing, round the dividend to the nearest compatible number. $3,695 \div 5$	18 Solve. $2\frac{2}{10} + 4\frac{7}{10}$	19 Solve. $\frac{7}{100} + \frac{6}{10}$
20 How many grams are in 7 kilograms 37 grams?	21 ____ is twice as many as 4.	22 Which number is less? $142,086$ or $142,680$	23 Solve. $795,046 - 58,937$	24 Solve. $4,409 \times 8$	25 Decompose $\frac{4}{5}$. $\frac{4}{5} = \frac{\quad}{5} + \frac{\quad}{5} + \frac{\quad}{5} + \frac{\quad}{5}$	26 Use $<$, $>$, or $=$ to compare the decimals. 0.6 ____ 0.58
27 How many minutes are in 8 hours 24 minutes?	28 What are the next four multiples of 6? $6, 12, \underline{\quad}, \underline{\quad}, \underline{\quad}, \underline{\quad}$	29 What is the value of the underlined digit? $712,\underline{9}84$	30 Solve. $657,247 + 49,051 + 102,886$	31 Solve. $1,172 \div 7$	MATH REVIEW OF THE DAY 	

Sunday

Monday

Tuesday

Wednesday

Thursday

Friday

Saturday



MATH REVIEW OF THE DAY

AUGUST 2025



1

Which fraction is less?
 $\frac{2}{5}$ or $\frac{1}{6}$

2

Write 0.04 as a fraction.

3

I am a quadrilateral with two sets of parallel sides. All of my sides measure 7 cm. None of my angles are right angles. What is my most specific name?

4

The rule is subtract 7. The starting number is 92. What are the next three numbers?
 92, ____, ____, ____

5

Write this number in expanded form.
 550,172

6

Solve.
 $36,117 + ? = 80,425$

7

Estimate. Before multiplying, round each multi-digit factor to its greatest place value.
 38×72

8

Solve.
 $\frac{3}{6} + 2\frac{5}{6}$

9

Write $\frac{82}{100}$ as a decimal.

10

A right angle is divided into two angles. One angle measures 23° . What does the other angle measure?

11

List all of the prime numbers from 70 to 80.

12

The value of the 3 in 834,175 is ten times the value of the 3 in _____.
 369,285 or 253,179

13

Solve.
 $? - 14,799 = 52,366$

14

Solve.
 68×94

15

Solve.
 $7 - 5\frac{3}{4}$

16

Solve.
 $\frac{5}{10} + \frac{29}{100}$

17

Start time: 9:47 A.M.
 End time: 12:18 P.M.
 How much time has elapsed?

18

In	Out
3	24
5	40
7	?

19

Round this number to the nearest 10,000.
 775,120

20

Solve.
 $70,000 - 35,612$

21

Solve.
 $9,257 \div 6$

22

Solve.
 $3 \times \frac{9}{10}$

23

Use $<$, $>$, or $=$ to compare the decimals.
 0.07 ____ 0.3

24

A regular pentagon has a side length of 28 cm. What is its perimeter?

25

List all of the composite numbers from 50 to 60.

26

Which number is greater?
 639,844 or 639,851

27

Solve.
 $800,000 - 419,581$

28

Solve.
 73×25

29

Solve.
 $3\frac{9}{12} + 1\frac{5}{12}$

30

Which is greater?
 0.5 or $\frac{48}{100}$

31

How many inches are in 2 yards 2 feet?

June Answer Sheet

Name _____

1 _____

11 _____

21 _____

2 _____

12 _____

22 _____

3 _____

13 _____

23 _____

4 _____

14 _____

24 _____

5 _____

15 _____

25 _____

6 _____

16 _____

26 _____

7 _____

17 _____

27 _____

8 _____

18 _____

28 _____

9 _____

19 _____

29 _____

10 _____

20 _____

30 _____

June Workspace

Name _____

Use this workspace to show any work you do. Be sure to write the problem number in each box.

# ____	# ____	# ____	# ____	# ____
# ____	# ____	# ____	# ____	# ____
# ____	# ____	# ____	# ____	# ____
# ____	# ____	# ____	# ____	# ____

July Answer Sheet

Name _____

1 _____

11 _____

21 _____

2 _____

12 _____

22 _____

3 _____

13 _____

23 _____

4 _____

14 _____

24 _____

5 _____

15 _____

25 _____

6 _____

16 _____

26 _____

7 _____

17 _____

27 _____

8 _____

18 _____

28 _____

9 _____

19 _____

29 _____

10 _____

20 _____

30 _____

31 _____

July Workspace

Name _____

Use this workspace to show any work you do. Be sure to write the problem number in each box.

# ____	# ____	# ____	# ____	# ____
# ____	# ____	# ____	# ____	# ____
# ____	# ____	# ____	# ____	# ____
# ____	# ____	# ____	# ____	# ____

August Answer Sheet

Name _____

1 _____

11 _____

21 _____

2 _____

12 _____

22 _____

3 _____

13 _____

23 _____

4 _____

14 _____

24 _____

5 _____

15 _____

25 _____

6 _____

16 _____

26 _____

7 _____

17 _____

27 _____

8 _____

18 _____

28 _____

9 _____

19 _____

29 _____

10 _____

20 _____

30 _____

31 _____

August Workspace

Name _____

Use this workspace to show any work you do. Be sure to write the problem number in each box. You may not need to use all of the boxes provided.

# ____	# ____	# ____	# ____	# ____
# ____	# ____	# ____	# ____	# ____
# ____	# ____	# ____	# ____	# ____
# ____	# ____	# ____	# ____	# ____

Directions: Complete a daily writing prompt to help work on your writing skills! Be creative and write as much as you can. Remember to write neatly. **THE DATES DO NOT MATCH UP!*

JUNE

Monday	Tuesday	Wednesday	Thursday	Friday
3 Write about the day everyone turned into a pool floatie.	4 Write an acrostic poem using the word SUNSHINE .	5 Write a story that has a setting in a treehouse.	6 Write about your summer plans.	7 FREE WRITE
10 Make a list of fun things you can do in the summer.	11 Use your list from yesterday to write about the best summer activity.	12 Write a narrative story that is titled "The Summer Adventure Across the USA".	13 Throwback Thursday! What was your favorite memory from summer last year? Tell all about it.	14 Today is Flag Day. What does the American flag represent to you? Why are you proud of it?
17 Write a song (yes, lyrics!) that has a song title of "Memories".	18 June can be a hot month. What is your favorite cool treat on a hot day? Describe it!	19 What is your favorite summer meal? Write a recipe for the main dish. Be sure to list ingredients & detailed directions.	20 FREE WRITE	21 Sunday is Father's Day. Write your dad a letter. Include a least 5 sentences. Be sure to use the correct letter formatting.
24 What is your biggest dream? Explain.	25 How do you feel about animals in captivity (ex: animals in zoos)? Explain why you feel this way.	26 Imagine you just won a trip for the entire summer to a place of your choice. Where would you choose to go and why?	27 Pretend you're a tourist guide in your hometown. Where would you take tourists & what would you show them?	28 Draw pictures to cover an entire page in your notebook. Make it represent your month of June.

JULY

Monday	Tuesday	Wednesday	Thursday	Friday
1 It's a new month! Write an acrostic poem using the word JULY.	2 Would you rather be known as the funniest kid ever or the kindest kid ever? Why?	3 Draw pictures that fill up the entire page, but you must only use the colors red, white, and blue. Finish by giving your work a caption!	4 Today is America's birthday. Why are you proud to live in the USA?	5 Go outside and observe the outdoors for 10 minutes. Then come back in and tell about your observations.
8 If you were granted 2 wishes, what would they be? Why would you wish this?	9 Would you rather go on vacation in the summer or in the winter? Explain why.	10 Write a story about how you woke up from a nap to your house floating on the ocean.	11 Write a story titled, "The Day My Legos Came to Life".	12 FREE DRAW
15 "Next school year I want to get better at ____ because..."	16 What kind of job do you want when you turn 16? Why would you want this job?	17 Do you think spending too much time on a device/cell phone is bad for people? Why or why not?	18 "When I am in high school, I want to..."	19 Write a story about one event that happened so far this summer.
22 "I have always wondered why..."	23 Write in the point of view of a dolphin swimming in the ocean. <i>(That means write as if you ARE a dolphin!)</i>	24 "My biggest fear is... because..."	25 School is just around the corner! What are your hopes and wishes for the new school year?	26 FREE WRITE
29 You're bored on a hot, summer day. What are you going to do.	30 Write a story that includes: a pool, gummy worms, and a squirt gun	31 Draw pictures to cover an entire page in your notebook. Make it represent your month of July.		

AUGUST

Monday	Tuesday	Wednesday	Thursday	Friday
	1 Tell me a crazy fact about yourself.	2 FREE DRAW	3 What subject is your favorite? Why is it your favorite?	4 What day of the week is your favorite? Why is it your favorite?
7 Tell me about your summer in at least 5 sentences.	8 Tell your teacher about yourself in as much detail as possible.	9 Draw a picture that shows something you did this summer. When you're done, give it a detailed caption.	10 List 3 goals you have for this school year.	11 What do you know about your new teacher? Make a list!
14 If you could have one superpower, what would it be AND WHY?	15 PROMPT STARTER: "You walk into school and the principal tells you the great news that...."	16 If you were given \$1,000 to donate to anyone or anything, who/what would you donate the money to & why?	17 Make a list of things you have learned about your classroom.	18 Using yesterday's list, what is your favorite part about your new classroom.
21 What is something you need your teacher to know about you as a student? Explain.	22 Make a list of 20 items you might purchase during your back-to-school shopping.	23 Write a short story that takes place in a school.	24 FREE WRITE	25 Write an acrostic poem using the word 'SCHOOL'.
28 Explain what your after school routine is like in as much detail as possible.	29 What do you love about your school? What makes it special?	30 Write a list of things that are often paired together. (Ex: chips & salsa)	31 Draw pictures to cover an entire page in your notebook. Make it represent your month of August.	