


JULY



	Monday	Tuesday	Wednesday	Thursday	Friday	
		1 Take a nature walk and write a poem about something you see.	2 Complete the silly sentences sheet.	3 Measure the length and width of the beds in your house.	4 Happy 4 th of July! Enjoy the fireworks!	5
6	7 Solve. Dad has 4 trays of cookies. Each tray has 8 cookies. How many cookies in all?	8 Collect shells at the beach and sort at home. Graph it.	9 Complete the Matching Numbers sheet.	10 Watch a video on how a bill becomes a law on Schoolhouse Rock.	11 Watch a Youtube video on "What are adjectives?"	12
13	14 Write 5 words that have "igh."	15 Draw and label what 3-D shapes you see.	16 Read your book. Tell your mom or dad about the author message.	17 Complete the Count Back paper.	18 Take a picture of a flower and draw it with detail. Label each part.	19
20	21 Practice sparkle words on the sidewalk with chalk.	22 Complete the Character Traits paper.	23 Draw things that end in "le" like puddle.	24 Paint a picture with watercolors.	25 Count coins. How many groups of ten can you make? What's the total \$?	26
27	28 Draw and write the steps for making your bed.	29 Write down 2 jokes and tell them to your family.	30 Count the change in Mom or Dad's wallet.	31 Write a story about a time you made a new friend.		



Write **Silly** sentences.

Trick: Each word must begin with the same letter and draw the scene below each sentence.

S _____


P _____

B _____

C _____

G _____





MATCH the numbers.

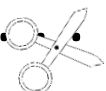
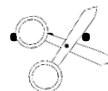
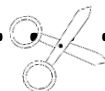
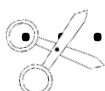
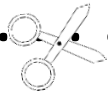
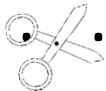
25

60

101

79

42

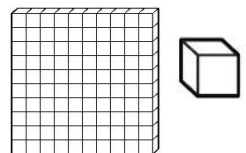



Has 6 tens
and nineteen
ones

$36 +$
 24

Has five
sets of 5

$54 -$
 12





Count back!

Using the number line, find the total by counting back.

81	80	79	78	77	76	75	74	73	72
----	----	----	----	----	----	----	----	----	----

1. $79 - 3 =$ _____

6. $80 - 4 =$ _____

2. $78 - 2 =$ _____

7. $77 - 4 =$ _____

3. $80 - 7 =$ _____

8. $75 - 3 =$ _____


4. $81 - 8 =$ _____

9. $74 - 2 =$ _____

5. $78 - 6 =$ _____

10. $81 - 5 =$ _____

George had \$80. He spent \$8. How much money did George have left?



Name a trait!

Read the passage below. At the bottom, write a trait for the character.

Adam loved his teacher, Mrs. Nixon. Adam liked school but sometimes he had trouble making the best choices. Adam didn't ever want to get in trouble, but it was bound to happen.

One day, Adam was talking and giggling when Mrs. Nixon had her back turned. The students were supposed to be doing their quiet work. When Mrs. Nixon turned around to write on the board, she heard the giggling. Each time she turned to look at the class, the giggling stopped. Mrs. Nixon continued writing on the blackboard. She continued to hear frequent giggling and it was getting louder. Mrs. Nixon turned around after even more giggling and asked the class, "Who is talking and laughing?" No one said a word. Finally, Adam spoke up. "It was me, Mrs. Nixon," Adam said softly.

Name a trait for Adam. Write it below. Color the evidence that supports your answer.

Adam is: _____



Here is how I make my bed!

Draw and write the steps that show what you do when you make your bed.

1

First, _____

2


Next, _____

3

Then, _____

4

Last, _____




AUGUST




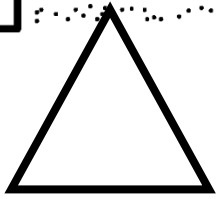
	Monday	Tuesday	Wednesday	Thursday	Friday	
					1 Draw a self portrait.	2
3	4 Write a letter to a distant relative.	5 Complete the Number Bond Page..	6 Interview the people in your house about their favorite summer foods. Make a graph.	7 Complete the Match the shape page.	8 Break down Mommy or Daddy's age into tens and ones. Now add together.	9
10	11 Write the days of the week in order.	12 Write a review of something you visit or use.	13 Draw a picture of your family and label each person.	14 List as many "-ed" words as you can.(jumped)	15 Write a persuasive letter to Mom or Dad with 3 reasons why they should let you stay up later.	16
17	18 Copy 10 3-digit numbers from around you house and order least to greatest.	19 Count the spheres and cubes in your toy box.	20 Ask your parent to tell you about the day you were born.	21 Compare and contrast two characters in your book.	22 Watch a movie with your family!	23
24	25 READ! READ! READ!	26 Count down from 120 by tens.	27 Complete an "additional activity" of your choice.	28 Write a letter to an aunt, uncle or grandparent.	29 Write number words 11-20 using markers.	30

Have a GREAT Year!!

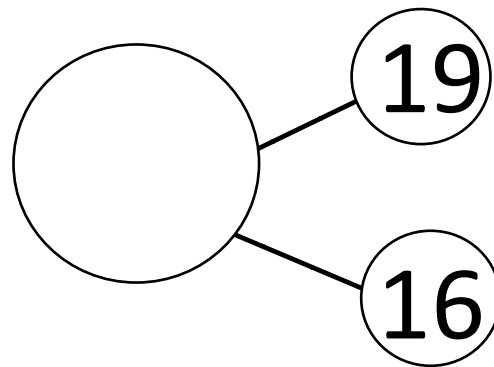
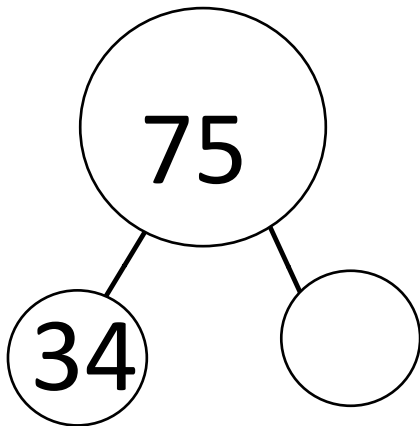
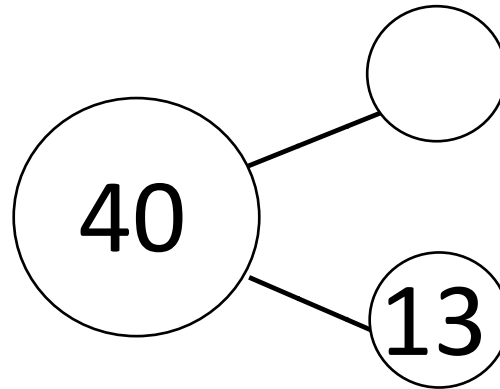
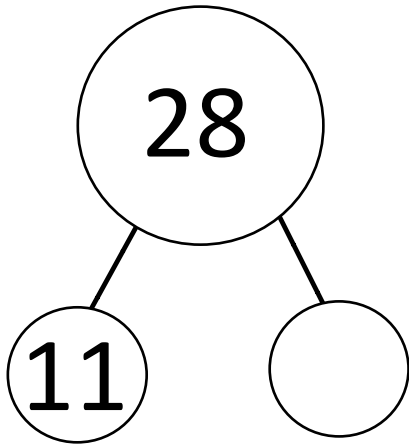


Draw Your Self Portrait



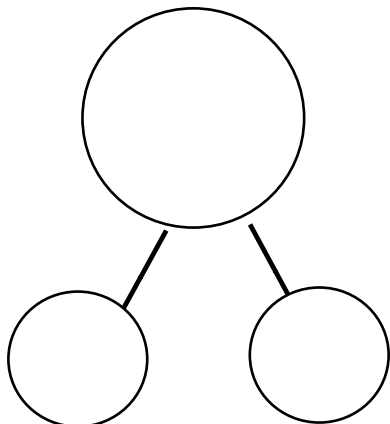


Complete the number bonds below.



Solve the problem using a number bond.

Jeremy sold 72 candy bars on Friday. He sold another 16 candy bars on Saturday. How many candy bars did Jeremy sell in all?




Write a number sentence.

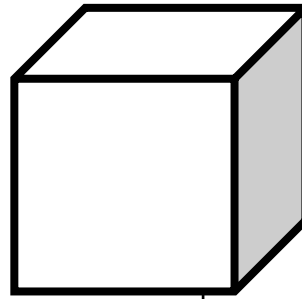
Jeremy sold _____ candy bars in all.



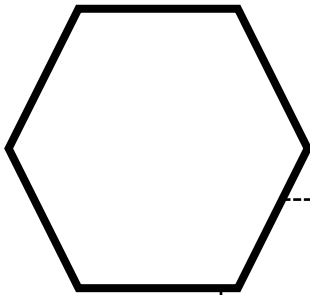
Match the shape to the description.



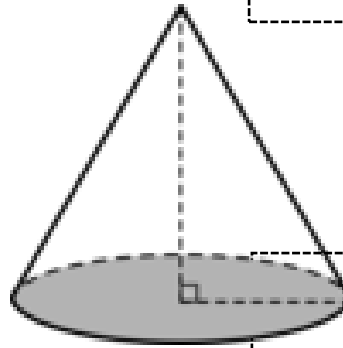
Glue here



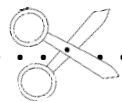
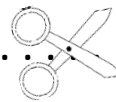
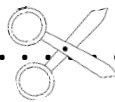
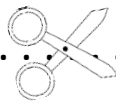
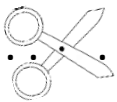
Glue here



Glue here



Glue here



I have one
flat face.

I roll and
have 2
flat faces.

I am a 2D
hexagon.

I have
8 vertices.

My Review of



by _____

© Can't Stop Smiling

.....

.....

.....

© Can't Stop Smiling

Handwriting practice lines consisting of three sets of solid top and bottom lines with a dotted midline.



Handwriting practice lines consisting of three sets of solid top and bottom lines with a dotted midline.